
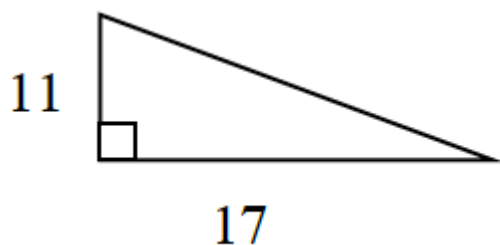



Ch. 8 Integrated Math 2B Homework for Week of May 21, 2018

8-16. Examine the triangle below. [Homework Help](#) 



- a. What is the perimeter of the triangle?

- b. What is the measure of each of the acute angles in the triangle?

8-17. Rewrite the following expressions using fractional exponents. [Homework Help](#) 

a. $(\sqrt{3x})^3$

b. $\sqrt[x]{81}$

c. $(\sqrt[3]{17})^x$