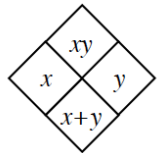
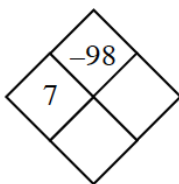


Homework Assignment Due: April 6, 2018

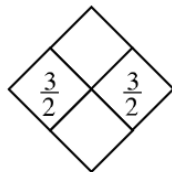
2-65. Copy these Diamond Problems and use the pattern you discovered earlier, shown at right, to complete each of them. Some of these may be challenging!



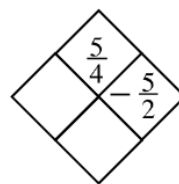
a.



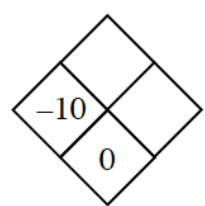
b.



c.

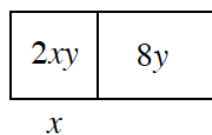


d.

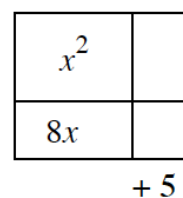


2-79. Copy each of the area models below and fill in the missing dimensions and areas. Then write the entire area as a product equivalent to the area as a sum. [Homework Help](#)

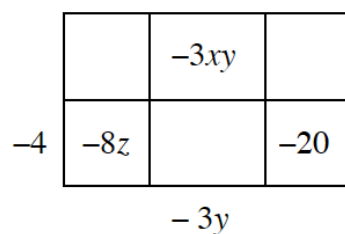
a.



b.



c.



d.

